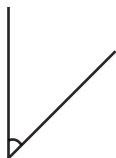
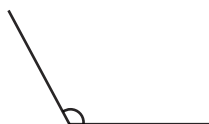


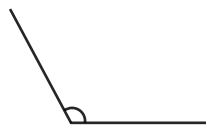
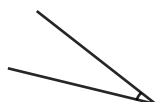
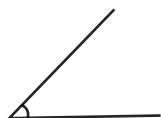
1) Circle the obtuse angles:



2) Look at these shapes. Label each of the interior angles as obtuse, acute or a right angle.



1) Which angle is the odd one out?



Explain your answer:

2) Romesh says, "A triangle can have two obtuse angles."

Is he correct? _____

Prove it!



1) Write a statement about the angles in a trapezium that is

a) never true: _____

b) always true: _____

Explain your answer: _____

2) Zafi adds three acute angles together to make an obtuse angle.

a) What is the smallest size her angles can be? _____

b) What is the largest? _____

c) Prove it! _____

